






prénom : _____



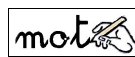


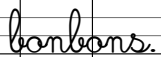
date : ____ / ____ / ____

Fiche n° 12

1 /  Calcule en colonnes.

2	1	3	4	0
+ 	+ 	+ 	+ 	+ 
5	5	5	5	5

2 / *Lari a 5 bonbons. Il mange un bonbon. Combien lui en reste-t-il ?*

		
	 = 	Il lui reste  bonbons.

3 /  Complète les opérations.

1 + ___ = 5	5 - ___ = 4
2 + ___ = 5	5 - ___ = 3
3 + ___ = 5	5 - ___ = 2
4 + ___ = 5	5 - ___ = 1
5 + ___ = 5	5 - ___ = 0

4 /  Calcule en ligne.

2 + 2 + 1 = ___	2 + 1 + 2 = ___
3 + 2 - 1 = ___	4 + 1 - 3 = ___
1 + 4 - 2 = ___	3 + 1 + 1 = ___