


prénom : \_\_\_\_\_


date : \_\_\_\_ / \_\_\_\_ / \_\_\_\_

## Fiche n° 19




$$6 > 4$$

6 est plus grand que 4



$$4 = 4$$


4 est égal à 4



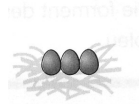
$$5 < 7$$

5 est plus petit que 7


1 /  Complète avec les signes <, > ou =.




\_\_\_\_\_




\_\_\_\_\_



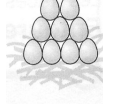
\_\_\_\_\_



\_\_\_\_\_




\_\_\_\_\_



2 /  Complète avec les signes <, > ou =.

5 \_\_\_\_\_ 2    3 \_\_\_\_\_ 3    6 \_\_\_\_\_ 0    4 \_\_\_\_\_ 7

7 \_\_\_\_\_ 4    1 \_\_\_\_\_ 5    0 \_\_\_\_\_ 0    2 \_\_\_\_\_ 4

3 /  Écris un nombre qui convient.

5 = \_\_\_\_\_    2 > \_\_\_\_\_    3 < \_\_\_\_\_    6 > \_\_\_\_\_

7 < \_\_\_\_\_    4 = \_\_\_\_\_    1 > \_\_\_\_\_    0 < \_\_\_\_\_

4 /  Calcule en colonnes.

$$\begin{array}{r} 7 \\ - 4 \\ \hline \end{array}$$

$$\begin{array}{r} 4 \\ + 2 \\ \hline \end{array}$$

$$\begin{array}{r} 7 \\ - 3 \\ \hline \end{array}$$

$$\begin{array}{r} 7 \\ - 5 \\ \hline \end{array}$$

$$\begin{array}{r} 6 \\ + 1 \\ \hline \end{array}$$