

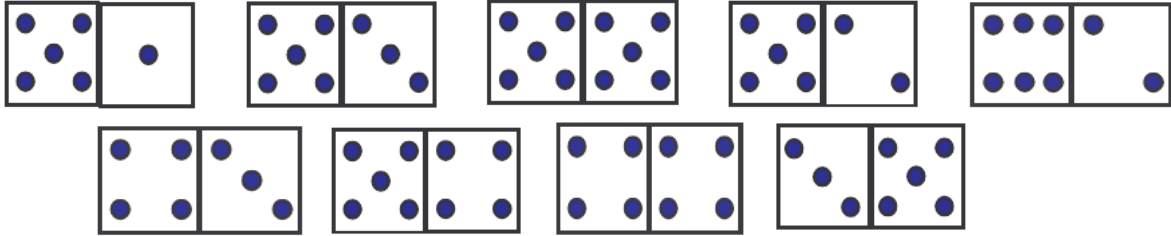


prénom : _____

date : ____ / ____ / ____

Fiche n° 22

- 1 /  **Entoure** les dominos qui ont 8 points.  **Colorie** en vert les dominos qui ont moins de 8 points et en rouge ceux qui ont plus de 8 points.








- 2 /  **Complète** avec les signes $<$, $>$ ou $=$.

$$4 + 4 \quad \underline{\quad} \quad 8 ; \quad 5 + 2 \quad \underline{\quad} \quad 8 ; \quad 4 + 3 \quad \underline{\quad} \quad 8$$
$$5 + 1 \quad \underline{\quad} \quad 8 ; \quad 5 + 3 \quad \underline{\quad} \quad 8 ; \quad 3 + 5 \quad \underline{\quad} \quad 8$$




- 3 /  **Complète** les opérations.

$$6 + \underline{\quad} = 8 \quad 1 + \underline{\quad} = 8 \quad 3 + \underline{\quad} = 8$$
$$8 - \underline{\quad} = 3 \quad 8 - \underline{\quad} = 4 \quad 8 - \underline{\quad} = 2$$

- 4 /  **Calcule** en colonnes.

7	8	5	8	8
+ 1	- 4	+ 2	- 2	- 6
				

- 5 /  **Dessine** les billes demandées et  **complète** l'opération.

		
2 fois 3 billes = ____	2 fois 2 billes = ____	2 fois 4 billes = ____